



INDIAN SCHOOL AL WADI AL KABIR

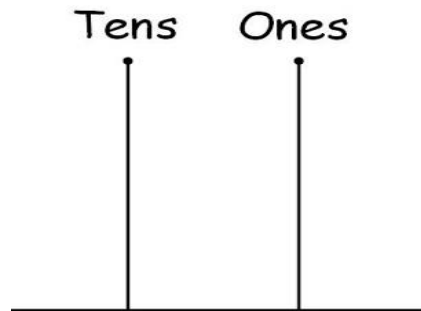
DEPARTMENT OF MATHEMATICS (2023 – 2024)

TOPIC: ABACUS

EXPLANATION NOTE

RESOURCE PERSON: Mrs. Hamin V

NAME: _____ CLASS: I SEC: _____ DATE: _____

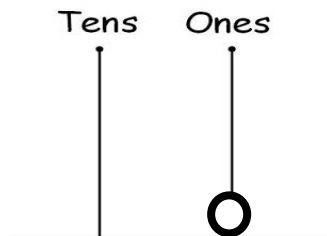


This is an **abacus**.

It has two houses (**Tens and Ones**)

The **Ones house** has numbers (**1-9**) only.

For eg:



T	O
	1

CHECKED BY: ACADEMIC COORDINATOR – CLASS - I

ISWK/DEPARTMENT OF MATHEMATICS /2023-2024



INDIAN SCHOOL AL WADI AL KABIR

DEPARTMENT OF MATHEMATICS (2023 – 2024)

TOPIC: ABACUS

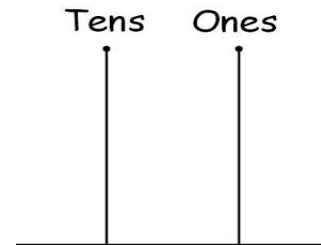
WORKSHEET - 1

RESOURCE PERSON: Mrs. Hamin V

NAME: _____ CLASS: I SEC: _____ DATE: _____

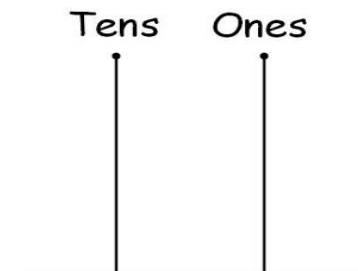
Draw the beads on the abacus.

a.



T	O
	3

b.



T	O
	7

CHECKED BY: ACADEMIC COORDINATOR – CLASS - I

ISWK/DEPARTMENT OF MATHEMATICS /2023-2024